

Class - V (2024-25)
English Practice Worksheet

Topics/Lessons covered: Lesson 5- Kinds of Nouns, Lesson 27 Capital Letters and Punctuation

Please note: The worksheet (questions as well as answers) to be written in English notebooks. No printouts to be pasted.

Q1. Read the sentences and place the underlined nouns in suitable columns:

1. The cat chased the bird across the yard.
2. Mount Everest is the highest mountain in the world.
3. Albert Einstein was a brilliant scientist who developed the theory of relativity.
4. Mount Kilimanjaro is the highest peak in Africa.
5. The movie, Peter Pan captivated the audience with its thrilling plot.

Common Nouns	Proper Nouns

Q2. Fill in the blanks with suitable collective nouns from the list.

(choir, pride, bunch, swarm, litter)

1. The cat has a of five kittens.
2. The of singers sang melodiously.
3. The jungle safari gave us an opportunity to spot a of lions.
4. A of grapes was hanging from the vine.
5. A of bees forced us to take shelter in the cave.

Q3. Write ABSTRACT NOUNS for the following words:

hate	_____	strong	_____
wise	_____	laugh	_____
long	_____	true	_____
proud	_____	die	_____

Q4. Put the correct end punctuation marks for each of these sentences.

1. Why are you so happy today
2. I like to play block jump with my friends
3. What a beautiful scene this is

4. John set the alarm clock for 6:00 am

5. Could you pass me the bottle, please

Q5. Fill in the blanks.

1. _____ is used after sentences which ask questions. (comma/ question mark)
2. _____ is used at the beginning of every sentence. (capital letter/ comma)
3. A _____ is used to separate two or more parts of a sentence that come together. (comma/ capital letter)
4. A _____ is used at the end of the sentence that expresses strong emotions. (exclamation mark/ fullstop)
5. A _____ is used to end statements. (full stop/ question mark)

Q6. Rewrite the following by using appropriate punctuation marks wherever necessary.

1. we went to the opera house while we were in Sydney

2. godan mantra and nirmala are some of the popular novels written by munshi premchand

3. max likes to play soccer football and cricket

4. what a lovely cake

5. will the ruling party win the elections again

HAPPY
SUMMER
HOLIDAYS



कक्षा - पाँचवीं (2024-25)

विषय - हिन्दी कार्यपत्रिका


विषय: अनुच्छेद लेखन, संज्ञा, पर्यायवाची शब्द, भाषा और लिपि, लिंग बदलों तथा अशुद्धि शोधन ।

सृजनात्मक लेखन

यात्रा वर्णन



(वर्णात्मक शैली)

विषय :हमारी रोचक रेल यात्रा





कब ?

कहाँ और क्यों ?




किसके साथ ?

पूर्व योजना



क्या अच्छा लगा?

कोई अन्य विचार



निष्कर्ष

प्रश्न 1 - उपरोक्त बिंदुओं के आधार पर अनुच्छेद लिखिए -
हमारी रोचक रेल यात्रा (अपनी उत्तरपुस्तिका में करें।)

प्रश्न 2 - वर्ग में लिखे संज्ञा शब्दों से कविता को पूर्ण कीजिए -

भाग	सागर	ई-मेल
कंप्यूटर	यंत्र	अभिमान
अंतरिक्ष	बटन	दोस्तों
विज्ञान	मौसम	जीवन

जब से आया है ----- , -----हो गया है आसान ।

क्या गुणा, क्या ----- , कर देता मुश्किल आसान ।

यह -----है अनोखा , नवयुग का है -----

सारे प्रश्नों को कर देता हल, सूचना सारी देता झटपट ।

----- दबाते चिट्ठी पहुँचाता , दूर ----- का हाल बताता ।

----- का रूप बताता, ----- से समाचार लाता ।

----- की गहराई नापता , तरह-तरह के खेल दिखाता।

----- पर चैट कराता , ज्ञान के सारे राज़ बताता ।

----- का अनोखा आविष्कार, जीवन इसने दिया सँवार

प्रश्न 3 - निम्नलिखित शब्दों के पर्यायवाची शब्द वर्ग-पहेली से छाँटकर लिखिए -

- क) शरीर
- ख) कृपा
- ग) कपड़ा
- घ) अग्नि
- ङ) पक्षी
- च) गृह
- छ) गणेश

द	पा	व	क
या	का	या	व
ख	आ	वा	स
ग	जा	न	न

प्रश्न 4 - निम्नलिखित भाषाओं की लिपियाँ बताओ -

(क) हिन्दी ----- (ख) उर्दू -----

(ग) अंग्रेजी ----- (घ) पंजाबी -----

प्रश्न 5 - दिए गए शब्दों के स्त्रीलिंग और पुल्लिंग रूप लिखिए ।

(i) शिक्षक -----

(ii) लेखक -----

(iii) प्रिया -----

(iv) विदुषी -----

(v) स्वामी -----

(vi) स्त्री -----

प्रश्न 6 - निम्नलिखित शब्दों में शुद्ध शब्द पर हरे रंग का गोला ○ लगाइए ।

(i) श्रीमती

श्रीमति

(ii) गुरु

गुरू

(iii) छमा

क्षमा

(iv) चिह्न

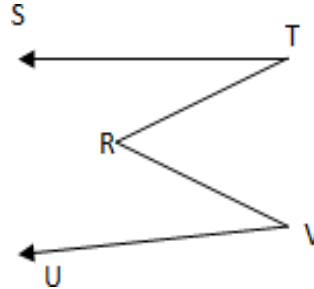
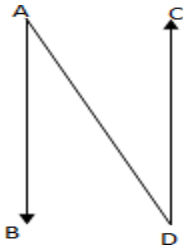
चिन्ह

CLASS - V (2024-25) MATHS PRACTICE WORKSHEET

Topics/Lessons covered: **SHAPES AND FIGURES**

Please note: The worksheet (questions as well as solutions) to be written in Maths notebooks.

Q1. Identify and name the line segments and rays in the following figures.



Line Segments:
Rays :

Line Segments:
Rays :

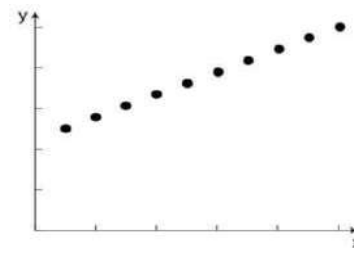
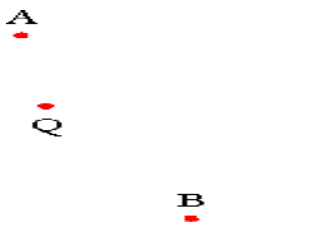
Q2. Classify the following as True(T) of False(F) statements:

1. Two diameter of a circle will always intersect. _____
2. A diameter is the longest chord of the circle. _____
3. A chord of 8cm can be drawn in a circle of radius 3 cm. _____
4. In a regular polygon all the sides are equal in length. _____
5. On a plane two lines can be either parallel or intersecting. _____

Q3. How many line segments can be drawn passing through:

- a. 1 point _____
- b. 2 points _____
- c. 3 points _____

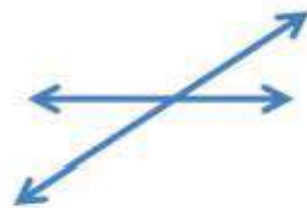
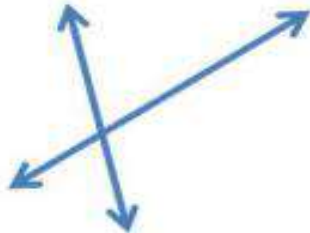
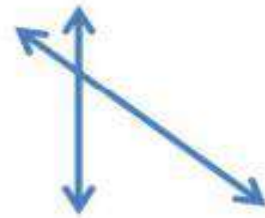
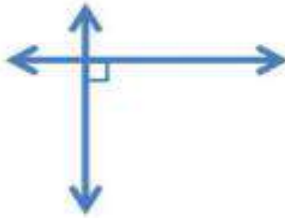
Q4. Identify which of the following points are collinear.



Q5. i. Line segment XY of length 2.5cm

ii. Line segment PQ of length 5.8cm

Q6. Write "parallel", "perpendicular" or "intersecting" below each pair of lines.

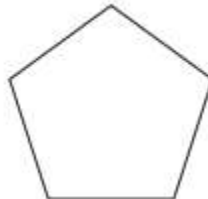


Q7. Write the number of sides and name each polygon.



Number of sides - _____

Polygon type - _____



sides - _____

name - _____



Class – V (2024-25)
Science Practice Worksheet

Topics/Lessons covered: Ch – 1: Plants: Increasing the Numbers, Ch – 2: Food and Health
Please note: *The worksheet (questions as well as answers) to be written in science notebooks.*

Q1. Imagine you are a gardener. You want to plant seeds to grow rose plants in your garden. What are the precautions you should take to ensure proper seed germination and healthy growth of the plant?

Q2. Give two examples for each of the following.

- a. Plants that can grow from their roots. _____
- b. Plants that can grow from their stems. _____
- c. Plants that can grow from their seeds. _____

Q3. The mineral X is needed to make a substance Y present in blood.

- a. What could the mineral X and substance Y?

- b. Give at least three sources of food of mineral X.

Q4. How can farmers use sustainable farming practices to protect crops from pests and diseases while ensuring the long-term availability of quality seeds for future harvests?

Q5. Complete the given table

Disease	Lack of Vitamin/Mineral	Sources
Night Blindness	Vitamin A	
Beri Beri		Milk, meat, unpolished rice
	Vitamin C	Citrus fruits, amla, tomato
Rickets	Vitamin D	
Goitre		Seafood, iodized salt
	Iron	Dates, apples, spinach

Q6. Give reasons.

a. Regular exercise and adequate rest are a must.

b. Breeding of flies must be prevented in or near our house.

Q7. Devki is a seed explorer. She threw a huge coconut into the pond water. She noticed that after a while the coconut started floating on the water. What makes a coconut float on the water despite its huge size?