

Class - II (2024-25)
English Practice Worksheet

Topics/Lessons covered: Grammar- Opposite words, Nouns – common and proper nouns

Please note: *This work (questions as well as answers) is to be done in English notebook. No printouts to be pasted.*

Name:

Class:

Section:

Q1) Fill in the blanks using the words from the box.

unhealthy	food	stale	everyday	breakfast
-----------	------	-------	----------	-----------

1. We should not eat _____ food.
2. We eat _____ in the morning.
3. We should drink milk _____.
4. We need _____ and water to live.
5. Eating a lot of candies is _____.

Q 2) Write down the opposite of the following words:

1. Cold- _____
2. Dry- _____
3. Empty- _____
4. Sweet- _____
5. Smooth- _____
6. Big - _____
7. Many - _____
8. Juicy- _____
9. Ripe- _____
10. Edible - _____




Q3) Make sentences of the following words:

1. **Healthy:** _____.
2. **Chew:** _____.
3. **Fruits:** _____.
4. **Bite:** _____.
5. **Bake:** _____.

Q4) Put the words in their correct order to make meaningful sentences.

- 1) like/I/tomato/soup/.
- 2) some/want/i/chocolate/.
- 3) don't/i/hamburgers/like/.
- 4) love/i/sandwiches/.
- 5) like/i/hotdogs
- 6) my/apples/are/favourite/fruit/.
- 7) hate/cheese/i/really/!
- 8) like/i/bread/white/.



Q5) Complete the crossword puzzle.

FRUITS

The crossword puzzle grid is as follows:

S	C	P	W	O	B
	K			G	
P	P				P

कक्षा : 2 (2024-25)
विषय: हिंदी
ग्रीष्मावकाश हेतु अभ्यास कार्य पत्रिका

Name:

Class:

Section:

विषय वस्तु – शब्दकोष में वृद्धि, अनुस्वार व अनुनासिक के शब्द

प्रश्न 1. दिए गए वाक्यों में इ या ई की मात्रा वाले शब्द लिख कर वाक्य पूरे करें-

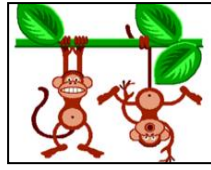



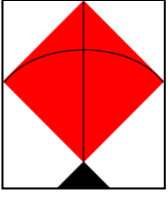
चिड़िया	हिन्दी	पानी	गिलास	जिराफ़	मकड़ी
डाकिया	साइकिल	दीपावली	चमेली	तितली	गणित
फुलझड़ी	मछली	माली	पपीता	इमली	पहिया

- कमल _____ से भरा _____ लाया ।
- _____ उड़कर बाहर गई ।
- _____ का _____ निकल गया है , उसे मत चलाओ ।
- _____ और _____ मेरे प्रिय विषय हैं ।
- _____ जल की _____ है, जीवन उसका _____ है ।
- _____ पर _____ बिक रही थी ।
- मीठा - मीठा _____ काट कर खाओ ।
- पेड़ पर खट्टी - मीठी _____ लटक रही है ।
- छत पर _____ जाला बना रही थी ।
- _____ हरी - हरी घास खा रहा था ।
- _____ के लिए पत्र लाया ।
- _____ के फूल पर रंग - बिरंगी _____ बैठी है ।

अनुस्वार या अनुनासिक

<https://www.youtube.com/watch?v=ahSty2UgnrU>

प्रश्न 2. चित्र को देखकर अनुस्वार या अनुनासिकवाले शब्द लिखें-



Class - 2 (2024-25)
Mathematics Practice Worksheet

Name: _____

Class: _____

Section: _____

Topics/Lessons covered: Shapes, Numbers upto 100, Revisiting Class 1

Please note: The work (questions as well as answers) to be done in mathematics notebooks. No printouts to be paste

Question 1: Food Shapes:

Children brought the following food items for the picnic. Look at the food items written below and write down the name of the shape that each food item resembles:

Example: Pizza Slice → Triangle

a) Apple → _____

b) Slice of a bread → _____

c) Watermelon → _____

d) Sandwich (cut in half) → _____

e) Pancake → _____



Question 2: During the picnic, children decided to play a quiz. Help them in completing the given series:

a) **Skip by 5:**
33, 38, _____, _____, 53, _____

b) **Skip by 2:**
54, _____, 58, _____, 62, _____

c) **Skip by 4:**
81, _____, 89, 93, _____, _____



Question 3: Place Value

Imagine children are setting up a picnic! Write down the place value of the underlined ingredient in each recipe:

a) Recipe for Lemonade: 35 lemons

The place value of the underlined digit is _____.

b) Recipe for Pasta: 175 grams of pasta

The place value of the underlined digit is _____.

c) Recipe for Sandwiches: 135 slices of cheese

The place value of the underlined digit is _____.



Question 4. Shape Bonanza! Observe the following shapes, count and fill in the columns:

a) The shape of the food item is _____



Horizontal lines	
Vertical lines	
Curved lines	
Slanting lines	

The shape of the food item is _____

b)



Horizontal lines	
Vertical lines	
Curved lines	
Slanting lines	

Ques 5 You're organizing a picnic and wish to sort the following beverages in increasing order:

Lemonade 75, Fruity 105, Soda 50, Bottled Water 120.

_____, _____, _____, _____

Arrange the following picnic items in decreasing order based on their quantities:

99 sandwiches, 98 pieces of fruit, 107 bags of chips and 56 cheese slices

_____, _____, _____, _____