



ENGLISH ASSIGNMENT 2022-23
CLASS : V

Name : _____

Class V Sec : ____ Roll No. ____

Prepared By: S. Chakraborty

General Instructions: Invasions have always affected civilization. Keeping the theme in view, activities have been designed for students to build new horizons of creativity and perspective. The activities mentioned here will be assessed for CCE Round IV. It has to be done neatly in the English notebook.

1. Your sibling is a student who has pursued higher studies in Ukraine. He/she has sent a letter to you stating the hardships faced due to the war. Write a letter to your sibling providing words of comfort.

2. You are the 'President- Interact Club' of your school. Write a Notice for a donation drive towards victims of Sri Lanka's economic crisis.

3. Speaking Skills Activity- Iconic speeches in the United Nations promoting world peace by countries in the past decade (2011-2022). A suitable date will be communicated later for class presentation.

4. Choose the correct Order of Adjectives.

- a. A. a beautiful, old woman B. an old, beautiful woman _____
- b. A. an amazing, Floridian sunset B. a Floridian, amazing sunset _____
- c. A. twelve shampoo, medium bottles B. twelve medium, shampoo bottles _____
- d. A. two square, blue tables B. two blue, square tables _____
- e. A. Italian, delicious meal B. delicious, Italian meal _____
- f. A. a stinky, bathroom towel B. a bathroom, stinky towel _____
- g. A. an ugly, old, yellow bus B. an old, yellow, ugly bus _____
- h. A. a large, pretty blanket B. a pretty, large blanket _____
- i. A. empty five trunks B. five empty trunks _____

5. Fill in the blanks with correct form of Tenses given in the bracket:

- a. Most of the trains late today. (is / are)
- b. He for a walk every day. (go / goes)
- c. We (has / have) a cricket match today.
- d. Mother (want / wants) me to study hard.
- e. We (is / are) all waiting for you.
- f. The school (closes / closed) for the Onam celebration last week.
- g. My daughter (want / wants) a doll for her birthday.
- h. My sister (work / works) at a bank.

- i. Where (do / does) you live?
- j. The cat (drank / drink / drunk) all the milk.
- k. My father (bake) delicious cakes.
- l. I (enjoy / enjoys) playing with my dog.
- m. I (meet / met) your father yesterday.
- n. I have never (see / saw / seen) a better movie.
- o. Ravi (sing / sings) very well.

6. Join the following sentences using an appropriate Conjunction.

- 1. He tried his best. He could not solve the puzzle.
- 2. She had a headache. She enjoyed the movie.
- 3. I was not feeling well. I took some rest.
- 4. We missed the bus. He walked home.
- 5. She has lost her job. She is facing a lot of financial difficulties.
- 6. He wants to find a good job. He is planning to move to the city.
- 7. She was depressed. She didn't know what to do.
- 8. They had been invited. They didn't come.
- 9. You want to go on a holiday. You need to save money.
- 10. He hadn't paid the fee. He was not allowed to write the exam.

7. Fill in the blanks with the following Prepositions:

- a. Distribute these chocolates _____ the students.
- b. Emma is sitting _____ John and Jerry.
- c. They will go _____ the Orient Express.
- d. He jumped _____ the flowing river to save the boy.
- e. A mango fell _____ the tree.

8. Write a Report to your senior editor at Hindustan Times regarding a gruesome accident near Modi Mall, Sector 21, Noida dated 02 January, 2023.

9. Fill in the blanks with the adverb form of the word given in the brackets.

- a. The cop asked him to drive (careful)
- b. She smiled (sweet)
- c. I am happy to hear this. (real)
- d. The baby is sleeping (sound)
- e. He left the room (quiet)
- f. The teacher asked the boy to write (neat)
- g. She solved the sum (easy)
- h. They are waiting for the results. (eager)

10. Given below is an incomplete conversation. Complete the Dialogue:

Sophia: Can I have an appointment with the doctor this evening ?

Receptionist : I'm sorry. (a)..... .

Sophia :Oh ! But I must see her, as I have to show her my reports so that (b)..... as possible.

Receptionist : OK. I will fix an appointment for 9 pm. But you must be on time, as the doctor leaves soon after.

11. Insert punctuation marks whenever required:

- a.) This is my friend Suresh
- b.) Vikas is good at teaching math
- c.) Why did you leave early from the party
- d.) How are you he asked me
- e.) How fast you ran


12. With the help of your teacher and find out the meaning of the following idioms and use them in a sentence.

a. Under the weather



meaning: _____

b. Down to earth



meaning: _____

13. What do the Contractions in these sentences stand for? Answer in the blank provided.

- a. a. I don't understand what you mean.
- b. b. She'll come over tomorrow.
- c. c. I could've gone to the football game.
- d. d. You shouldn't talk with your mouth full.
- e. e. I won't be home until Thursday.
- f. She's gone to the bank already.
- g. They weren't in the kitchen.
- h. Billy wasn't eating any of the cake.
- i. I've already cleaned the dishes.
- j. We'd better not make too much noise.

14. With reference to "Description Of a Person" , describe Joseph from the lesson 'Joseph and The Truth Stick'.

15. Describe your favourite place that you travelled with your family during your winter break.

शीतकालीन अवकाश अभ्यास कार्यपत्रिका

विषय -हिन्दी



निर्देश - सभी प्रश्न अनिवार्य हैं। कार्यपत्रिका का प्रिन्ट लेकर उत्तरपुस्तिका में चिपकाएँ
अथवा सम्पूर्ण कार्य अपनी हिन्दी उत्तरपुस्तिका में करें व 17 जनवरी तक जाँचने हेतु
दें।

प्रश्न 1- अपठित गद्यांश - (गद्यांश को पढ़कर दिए गए प्रश्नों के उत्तर दें।)

संसार में शांति, व्यवस्था और सद्भावना के प्रसार के लिए बुद्ध, ईसा मसीह, मुहम्मद चैतन्य, नानक आदि महापुरुषों ने धर्म के माध्यम से मनुष्य को परम कल्याण के पथ का निर्देश किया, किंतु बाद में यही धर्म मनुष्य के हाथ में एक अस्त्र बन गया। धर्म के नाम पर पृथ्वी पर जितना रक्तपात हुआ उतना और किसी कारण से नहीं। पर धीरे-धीरे मनुष्य अपनी शुभ बुद्धि से धर्म के कारण होने वाले अनर्थ को समझने लग गया है। भौगोलिक सीमा और धार्मिक विश्वासजनित भेदभाव अब धरती से मिटते जा रहे हैं। विज्ञान की प्रगति तथा संचार के साधनों में वृद्धि के कारण देशों की दूरियाँ कम हो गई हैं। इसके कारण मानव-मानव में घृणा, ईर्ष्या, वैमनस्य कटुता में कमी नहीं आई। मानवीय मूल्यों के महत्व के प्रति जागरूकता उत्पन्न करने का एकमात्र साधन है शिक्षा का व्यापक प्रसार।

प्रश्न(क) मनुष्य अधर्म के कारण होने वाले अनर्थ को कैसे समझने लगा है?

(i) संतों के अनुभव से ()
()

(ii) वर्ण भेद से

(iii) घृणा, ईर्ष्या, वैमनस्य, कटुता से ()
बुद्धि से ()

(iv) अपनी शुभ

(ख) विज्ञान की प्रगति और संचार के साधनों की वृद्धि का परिणाम क्या हुआ है ?

(i) देशों में भिन्नता बढ़ी है। ()

(ii) देशों में वैमनस्यता बढ़ी है। ()

(iii) देशों की दूरियाँ कम हुई हैं। ()

(iv) देशों में विदेशी व्यापार बढ़ा है। ()

(ग) देश में आज भी कौन-सी समस्या है?

(i) नफ़रत की ()

(ii) वर्ण-भेद की ()

(iii) सांप्रदायिकता की ()

(iv)

अमीरी-गरीबी की ()

(घ) किस कारण से देश में मानव के बीच, घृणा, ईर्ष्या, वैमनस्यता एवं कटुता में कमी नहीं आई है?

(i) नफ़रत से ()
से ()

(ii) सांप्रदायिकता

(iii) अमीरी गरीबी के कारण ()
()

(iv) वर्ण-भेद के कारण

(ङ) मानवीय मूल्यों के महत्व के प्रति जागरूकता उत्पन्न करने का एकमात्र साधन है-


(i) शिक्षा का व्यापक प्रसार ()
प्रसार ()

(ii) धर्म का व्यापक

(iii) प्रेम और सद्भावना का व्यापक प्रसार ()
उपरलिखित ()

(iv)

प्रश्न2-विश्व शांति व सौहार्द विषय से संबंधित महापुरुषों के द्वारा लिखित अथवा स्वनिर्मित स्लोगनों को सुंदर चित्रों सहित लिखकर एक पट्टिका (Plaque card) बनाएँ।(इस गतिविधि का मूल्यांकन चक्र-4 परियोजना कार्य के अंतर्गत किया जाएगा।)



व्याकरण

प्रश्न2-संप्रत्यय चित्र - कारक (पूर्ण करो)

कारक	परसर्ग	उदाहरण
कर्ता कारक		
	को	
करण कारक		
	को, के लिए	
अपादान कारक	से (अलग होना)	

ख) हर व्यक्ति एक दूसरे को दोष दे रहा है ।

ग) कुम्हार मिट्टी के बर्तन बनाता है।

घ) कुछ ही देर में वहाँ भीड़ जमा हो गई।

प्रश्न 5-निम्नलिखित वाक्यों में क्रियाविशेषण शब्दों के नीचे रेखा खींचिए और भेद का नाम लिखिए ।

क) अध्यापिका जी अभी आई हैं । _____

ख) वह अचानक उठकर चला गया । _____

ग) तुम बहुत तेज चल रही हो । _____

घ) क्षमा भीतर बैठी है। _____

प्रश्न 6- दिए गए चित्रों के तीन-तीन पर्यायवाची लिखो-











प्रश्न 6-उचित विराम चिह्न लगाकर वाक्य दोबारा लिखो-

क) माँ ने कहा खाना खाते समय ज़्यादा नहीं बोलो

ख) हमें अपने भोजन में फल साग सब्ज़ी दाल दही और अनाज़ शामिल करना चाहिए

ग) क्या तुम हमेशा इतना धीरे धीरे चलते हो

प्रश्न 7-वाक्यांशों के लिए एक शब्द लिखिए -

क) जो सामने हो - _____

ख) देश-विदेश में घूमना - _____

ग) जो ईश्वर में विश्वास रखता हो - _____

घ) नई चीज़ की खोज करने वाला - _____

ङ) महीने में एक बार होने वाला - _____

प्रश्न 8-उचित मुहावरा भरकर वाक्य पूरे कीजिए-

क) उस कंजूस राम भरोसे से पैसे

निकलवाना _____ है।

ख) मेरा बेटा मेडल जीतकर लौटेगा तो मैं

_____।

ग) महाराणा प्रताप का घोडा

_____ था ।

निर्देश -वार्षिक परीक्षा में आने वाले सम्पूर्ण पाठ्यक्रम का अभ्यास करें ।

Winter Holiday Homework

Name:- _____

Class& Section: _____

Subject: - ICT & AI

Prepared by: Rupali P.

General Instructions: Kindly note - you can take a printout or you can complete the sheet in your ICT notebook. Questions are compulsory.

Q 1. Fill in the blanks

1. Allows user to send a file with e-mail _____
2. is used for controlling the position of text. _____
3. To send a received mail to another person, you need to the message _____
4. The Excel workbook contains sheet called _____
5. The direction of flow in any flowchart should be from _____

Q 2. the terms:

1. Shouting

2. Flowchart

3. Sprite

Q 3. Answer the following questions:

1. What are the different parts of an E-mail address?

2. What is the role of file explorer in windows 10?

3. Explain the difference between Autocorrect and Autoformat?

4. Write down the code of Addition of 2 numbers. Take a number from user.

Artificial Intelligence

Q 1. Explain the terms:

1. CTM :

2.NLP_____

3.CV_____

Q 2. Answer the following questions:

Q 1. Write down 4 different applications of Facial recognition.

Q 2. Explain How AI is helping in Education

Q 3. List two advantages of Artificial Intelligence.

Q 4. Explain How AI helping in Manufacturing Industry



Winter Holiday Homework
Assignment Sheet
Mathematics

Name of the student: _____

Class: _____ Sec: _____ Prepared by: Ms. Ruchika Khanna

General Instructions: Kindly note - you can take a printout or you can complete the sheet in your Maths notebook. All Questions are compulsory

Q1) Convert the following into decimals.

a. 198 mm = _____ cm

b. 375 ml = _____ litres

c. 7gm = _____ kg

Q2) Write the place value of the underlined digits.

a. 86.09 _____

b. 712.65 _____

Q3) Complete the following statements and write the number.

a. Three fourth of 16 - _____

b. One quarter of 36 - _____

c. One half of 72 - _____

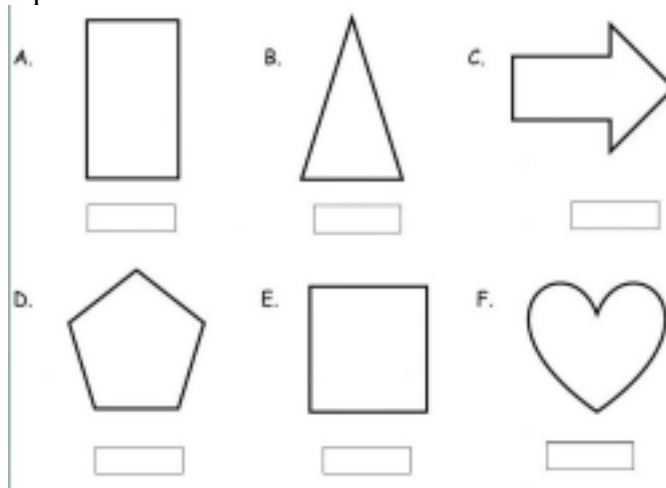
Q4) Which of the following are equivalent decimals.

a. 0.70 and 0.7 _____

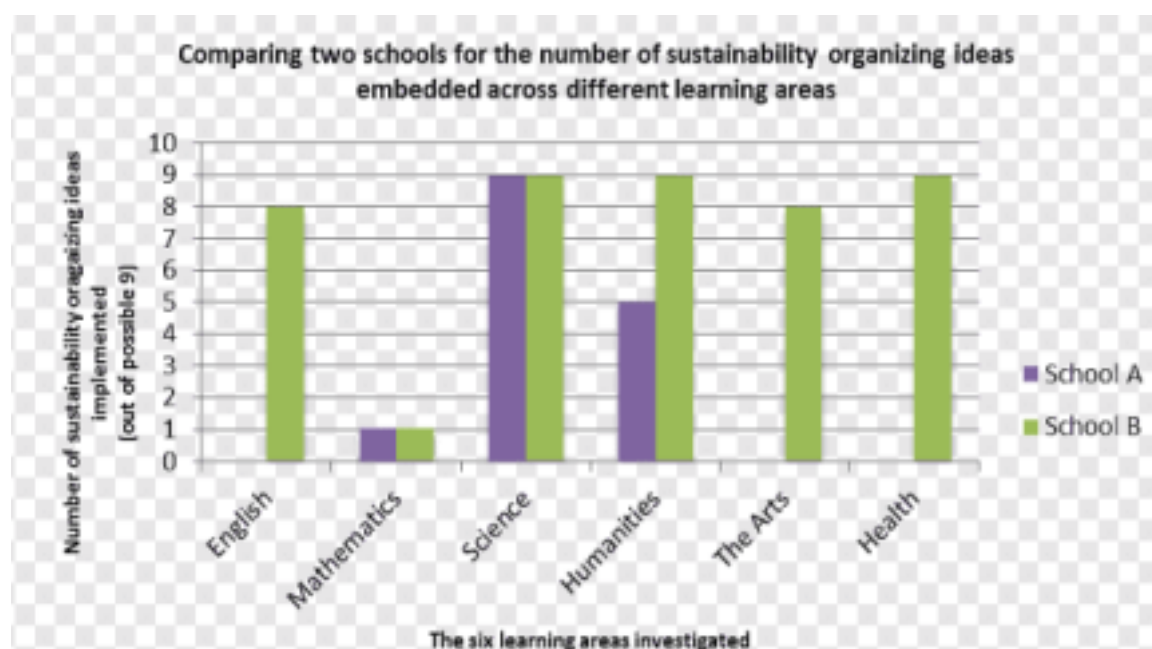
b. 4.62 and 4.062 _____

c. 15.2 and 15.20 _____

Q5) Draw the lines of symmetry in the following shapes and write how many lines of symmetry for each shape.



Q6) Read the graph given below and answer the questions



a) Which school has implemented maximum sustainability ideas?

b) In which subjects both schools have the same number of sustainability ideas?

c) How many ideas are embedded in Maths by school B?

d) Find the difference in the number of ideas for humanities subject of both the schools.

e) In which subjects school A has not implemented any sustainability organizing ideas?

Q7) What is the rule in the given pattern:

1, 2, 4, 8,

- a. Consecutive multiples of 2 are written.
- b. The multiplication table of 2 written.
- c. The pervious term is multiplied by 2 to get the next term.
- d. Adding 2 to the pervious term to get the next term.

Q8). An ordinary bucket used in the house may have a capacity of about

- a. 18ml b. 18l c. 8ml d. 18/

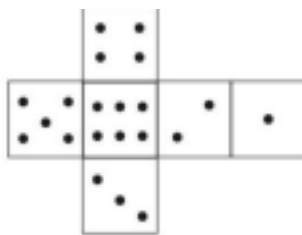
Q9) $\frac{3}{4}$ means:

- a. Three parts out of total four parts of whole.
- b. Three equal parts out of four parts of a whole.
- c. Three parts out of four equal parts of a whole.
- d. Three has to be divided into four equal parts.

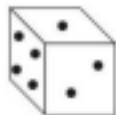
Q10). The 8th term of 1, 2, 3, 5, 8, ... would be _____.

How did you find out?

Q11) The given cut-out can be folded to make a dice. Also, make it using a paper and attach the picture of the same.



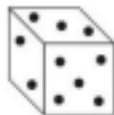
Which of the following cubes will not be obtained by folding the above cutout?



(a)



(b)



(c)

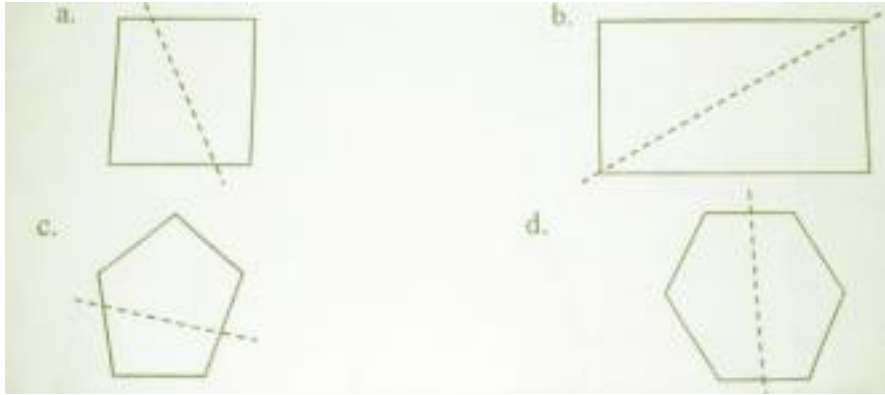


(d)

Q12). The length of the crayon is _____.

Q13) In which of the following figure is the dotted line a line of symmetry?





Q14) A shopkeeper used a piece of stone along with a 500gm and 200gm to weigh potatoes which were 1 kg 200gm in weight. What is the weight of the stone?



(Show the Working)



Bal Bharati
PUBLIC SCHOOL
Sector-21, Noida, G.B. Nagar

SCIENCE WINTER HOLIDAY HOMEWORK WORKSHEET

CLASS-V

Name: _____

Section: _____

Prepared By: Yasha S.

General instructions:

All the questions and their respective parts are compulsory. Students can take a printout or complete the sheet in the Science notebook.

Q1. All new plants do not grow from seeds. Certain plants grow from other parts of the parent plant. Explain using two examples.

Q2. Give two examples from your daily life.

a) First class lever: _____ , _____

b) Second class lever: _____ , _____

c) Third class lever: _____ , _____

Q3. Observe the images given below carefully and mark them as renewable or non-renewable energy sources.



Solar



Oil



Geothermal



Coal



Hydropower



Nuclear



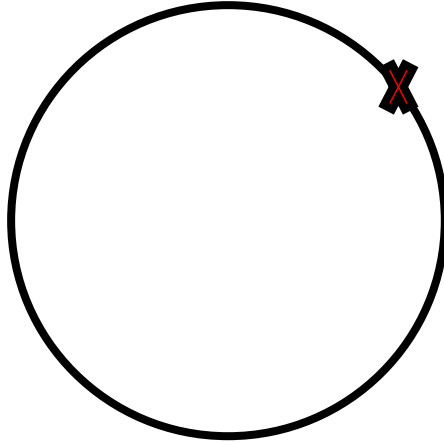
Natural gas



Wind

Read the statement given below and answer the questions.

Rahul lifted up a bag weighing 10 kg and started walking from point X.



Q4. What is the amount of work done if he comes back to point X with the bag.

Q5. Explain the reason for the same.

Q6. All deficiency diseases are non-communicable but not all non-communicable diseases are deficiency diseases. Explain.

Q7. How are miscible liquids different from immiscible liquids?

Q8. Is there any difference between the teeth of carnivores and herbivores? Explain.

Q9. Give one word answer:

a) Joint that allows maximum range of motion: _____

b) Joint that allows minimum range of motion: _____

Read the statement given below and answer the questions.

It is the largest organ of and forms the outermost covering of the human body.

Q10. Which organ is being talked about here? What are its functions?

Q11. List any two steps to take care of it.

Q12. Define pasteurization. Who is responsible for inventing this technique?

Q13. How do insects cause the spread of diseases? Explain with the help of any two examples.

Q14. Draw a well labelled diagram of the sense organ responsible for vision.

Q15. With the help of a mind map/ flowchart explain the topic “Nerves”.



Bal Bharati
PUBLIC SCHOOL
Sector-21, Noida, G.B. Nagar

Winter Holiday Homework **Assignment Sheet**

Name: _____
Date: _____

Class & Section: _____
Prepared By: Ms.Smriti S.

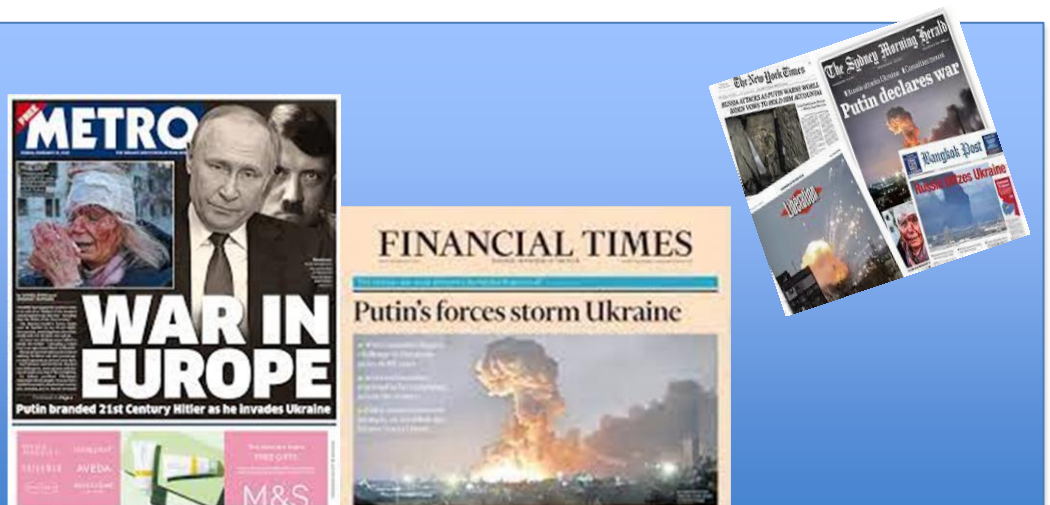
General Instructions: Kindly note - you can take a printout or you can complete the sheet in your SST notebook .All Questions are compulsory.

Q1) Unscramble the words and Also, find the names of the countries and mark them on the political map of the world.

S.no.	Term	Unscramble
1	OEWMN	
2	OETPVYR	
3	LMTCIAE	
4	INHCA	
5	USRSAI	



Q2) Read and understand the reason for the war between Russia and Ukraine. Paste at least 5 reports from the newspaper that comes to your home. A sample is given below.



Q3) Find out the following about the State /Union Territory you live in.

- **Number of seats in the Lok Sabha** _____
- **Strength of the Legislative assembly** _____
- **Name of the Chief Minister** _____

Q4) Jane Austen an English Novelist and a famous author had written many famous books on the upper class in England. Have you read any book, if yes then explain in less than 50 words and if not, then which book do you want to read and why?

Q5) Picture Study:

- **Name the type of pollution that is shown in the picture** _____
- **List the causes of this type of pollution**



- **How can you prevent this type of pollution?**

Q6) Look up the internet and find out the five most destructive earthquakes in the world. Then fill in the table below:

S.no.	Year	Country	Reading on Richter Scale
1			
2			
3			
4			
5			

Q7) List any two similarities between Martin Luther King Jr. and Abraham Lincoln.

Q8) Mahatma Gandhi was a ‘messenger of peace’. Find out the names of few more messengers of peace. Search for information on one of them and write about them in 50 words maximum.

शीतकालीन अवकाश अभ्यास कार्यपत्रिका

विषय -संस्कृत

चित्र देखकर उचित शब्द भरिए व कहानी पूर्ण करिए -



अत्र एकः _____ (पशुःनाम)अस्ति। हरिणः वने _____ (भ्रम)।

एकः शवरः _____ (अव्यय) आगच्छति। हरिणः शवरम्
_____ (दृश)। हरिणः दूरे _____ (धाव)।

शवरः हरिणम् मारयितुम् _____ (इच्छ)।



तदैव एकः बालकः _____ (अव्यय) आगच्छति। बालकः शवरस्य

समीपे _____ (गम) कथयति च। हरिणम् मा (मत) मारय।

एषः अतिप्रियः _____ (अस)।



बालकस्य वचनम् शृणोति। शवरस्य हृदय दया उत्पन्ना _____(भू)। सः हरिणम् न

मारयति। बालकः प्रसन्नः भवति ।

पहेली बूझो -

1)यः वृक्षे कूर्दति सः - _____

2)यः तीव्रं धावति सः - _____

3)यः वनराजः अस्ति सः - _____

4)यः भारं वहति सः - _____

5)यः मरुस्थले सहायकः भवति सः - _____

6)यः शनैः शनैः चलति सः - _____

चित्रों को देखकर उचित शब्द भरकर वाक्य पूर्ण करो-



-----आकाशे उड्डयन्ति।



-----नृत्यति।



_____ वृक्षेषु कूर्दन्ति।



_____ क्रीडन्ति।



आकाशे _____ उदितः।

महत्वपूर्ण निर्देश -संस्कृत परीक्षा चक्र 3 में आने वाले पाठ्यक्रम का अभ्यास करें तथा शब्द रूप बालक व फल याद करें ।

पाठ्यक्रम में निहित दिसंबर,जनवरी तथा फरवरी माह के अंतर्गत दिए गए श्लोकों का अभ्यास करें ।

१ से २० तक संस्कृत में गिनती लिखने का अभ्यास करें ।

Class V: Schedule for submitting Winter Holiday Homework Worksheet.

S.No.	Subject	Submission Date
1	English	11.01.23
2	Hindi	13.01.23
3	Science	16.01.23
4	Maths	18.01.23
5	SST	20.01.23
6	Sanskrit	24.01.23
7	ICT	27.01.23