



Bal Bharati
PUBLIC SCHOOL

Sector – 21, Noida
Phone : 0120-2534064, 2538533 / e-mail : bbpsnd@yahoo.co.in
Website : [http : www.bbpsnoida.com](http://www.bbpsnoida.com)

ENGLISH ASSIGNMENT
CLASS – V

NAME :
CLASS: V SEC:..... ROLL NO

READING SKILLS

Q1 Read the following passage:

OUTSMARTED!!

The angry King ordered his guards to put his minister in prison. The minister had argued with the king on some law and order issue. One day, the King made a visit to the prison. The minister was lost in his own world. The King told him, "I will release you on one condition. You need to bring me a horse that is neither white, nor black, nor brown, nor grey." The minister was astonished at this demand. However, he agreed to this condition.

A week later, the minister came to the palace. "Have you found the horse?", the king asked. "Yes, my Lord," the minister replied. "But I will show him to you only on an auspicious day." The king agreed. "Let me know the next auspicious day."

The minister replied, "I will show you the horse on any day, other than Sunday, Monday, Tuesday, Wednesday, Thursday, Friday and Saturday." The king burst out laughing. He was cleverly outsmarted by his minister. The minister was released and promoted to the next higher position.

Q. Based on your reading, now answer the following questions:

a) Why did the king put his minister in prison?

b) What was the King's condition to release his minister? _____

c) Why did the king laugh?

d) 'astonished' means _____.

1) prosperous

2) successful

3) greatly surprised

Q2 Read the following poem:

A Tiger in the Zoo

He stalks in his vivid stripes
The few steps of his cage,
On pads of velvet quiet,
In his quiet rage.

He should be lurking in shadow,
Sliding through long grass
Near the water hole
Where plump deer pass.

He should be snarling around houses
At the jungle's edge,
Baring his white fangs, his claws,
Terrorising the village!

But he's locked in a concrete cell,
His strength behind bars,
Stalking the length of his cage,
Ignoring visitors.

He hears the last voice at night,
The patrolling cars,
And stares with his brilliant eyes
At the brilliant stars.

Leslie Norris

Q. Based on your reading, now answer the following questions:

a) Why does the tiger walk only a few steps?

b) Where, according to the speaker, should the tiger be?

c) Why would a tiger hide near a water hole?

d) What are the words the speaker uses to describe the tiger's movements?

GRAMMAR SKILLS

Q:1) Fill in the blanks with correct degree of the adjectives given in the brackets:

1. My luggage is _____ than yours.(heavy)
2. She has many _____ friends. (sincere)
3. The dog was as _____ as his master.(smart)
4. This is the _____ lane in the town.(narrow)
5. His writing is much _____ than his sister's.(good)

Q:2) Join the following sentences with suitable conjunctions:

1. Is this movie a comedy? Is it a thriller?

2. I was tired. I had been driving for five hours.

3. She is popular. She is friendly and helpful.

Q:3) Fill in the blanks with correct prepositions:

1. Sudha jumped _____ the river.
2. She did her homework _____ the afternoon.
3. He went to sleep _____ night.
4. The examinations are held _____ March.
5. The examinations begin _____ 15th march

Q:4) Fill in the blanks with a or an. Put x where neither a nor an is needed.

1. He does not take _____ sugar in his tea.
2. We need _____ ambulance to take him to _____ hospital
3. _____ water and _____ air are necessary for _____ life.
4. _____ gold ring will be _____ expensive gift.
5. She is _____ student of _____ architecture.
6. They found _____ snake in _____ empty tin.

Q:5) Fill in the blanks with a, an and the.

1. She gave me _____ egg and _____ orange. _____ egg was rotten but _____ orange was good.
2. He lost _____ arm in _____ accident. _____ accident took place many years ago.
3. _____ principal explained _____ whole problem to _____ parents.
4. We need water for drinking. _____ water we use for drinking must be pure.
5. I bought _____ dress yesterday. _____ dress is made of cotton.

Q:6) Fill in the blanks with correct form of Tense given in bracket:

1. They _____ furniture for their new flat. (Buy-present continuous tense)
2. It _____ heavily outside. (Rain- Present continuous tense)
3. I _____ myself. (Hurt-Present perfect tense)
4. Namita _____ a new dress.(Buy- Present perfect tense)
5. I _____ my lesson yesterday. (revise-Past tense)



Bal Bharati
PUBLIC SCHOOL

Sector – 21, Noida

Phone : 0120-2534064, 2538533 / e-mail : bbpsnd@yahoo.co.in

Website : http : www/bbpsnoida.com

कार्यपत्रिका

विषय - हिन्दी

कक्षा - पाँचवीं

नाम -----

अनुक्रमांक ----- कक्षा ----- वर्ग -----

निर्मात्री - मनीषा सेठी

प्रश्न क) निम्नलिखित पद्यांश को पढ़कर प्रश्नों के उत्तर दो।

नभ से निर्मलता लूँ ,
शशि से शीतलता लूँ ,
धरती से सहनशक्ति ,
पर्वत से दृढ़ता लूँ ,
मेरी अभिलाषा है।

प्र 1 प्रस्तुत पंक्तियों में कवि पर्वत से क्या लेना चाहता है ?

प्र 2 कवि शशि से क्या लेना चाहता है ?

प्र3 कवि धरती से क्या लेना चाहता है ?

प्र 4. इस पद्यांश का उचित शीर्षक लिखें। -----

प्रश्न ख) वर्ग-पहेली में से संज्ञा शब्द छाँटकर अलग-अलग कीजिए।

प	ट	ना	ष	मो	ल
जी	त	क	र	टा	ड़
पे	ड़	भ	ड	पा	का

व्यक्तिवाचक संज्ञा - -----

जातिवाचक संज्ञा - -----

भाववाचक संज्ञा - -----

प्रश्न ग) उचित कारक चिह्न द्वारा रिक्त स्थान भरिए -

1) हमें गरीबों----- मदद करनी चाहिए।

2) मुझे दुकान ----- अन्न खरीदना है।

प्रश्न घ) 'उप' उपसर्ग लगाकर दो शब्द बनाइए। -----

प्रश्न ङ) 'इत' प्रत्यय लगाकर दो शब्द बनाइए। -----

प्रश्न च) दिए गए शब्दों से वाक्य पूरे करें।

लड़का दरवाजे की ----- भागा। (और, ओर)

मीना ----- शीला घर गई।

प्रश्न छ) दिए गए शब्दों से विशेषण शब्द बनाकर रिक्त स्थान भरिए।

1) केशव बहुत ----- है। (दया)

2) समुद्र का पानी ----- है। (नमक)

प्रश्न ज) दुकान पर सामान खरीदते बच्चे व दुकानदार के बीच हुआ वार्तालाप लिखिए ।



बच्चा : -----

दुकानदार : -----

बच्चा : -----

दुकानदार : -----

बच्चा : -----

दुकानदार : -----

प्रश्न झ) निम्न गद्यांश को पढ़कर प्रश्नों के उत्तर दीजिए ।

दिल्ली का लाल किला का यह नाम इसलिए पड़ा क्योंकि यह लाल पत्थरों से बना है और यह दुनिया के सर्वाधिक प्रभावशाली भव्य महलों में से एक है। भारत का इतिहास भी इस किले के साथ काफी नजदीकी से जुड़ा है। यहीं से ब्रिटिश व्यापारियों ने अंतिम मुगल शासक, बहादुर शाह जफर को पद से हटाया था और तीन शताब्दियों से चले आ रहे मुगल शासन का अंत हुआ था। यहीं के प्राचीर से भारत के प्रथम प्रधानमंत्री, पंडित जवाहर लाल नेहरू ने घोषणा की थी कि अब भारत उपनिवेशी राज से स्वतंत्र है। मुगल शासक, शाहजहां ने 11 वर्ष तक आगरा से शासन करने के बाद तय किया कि राजधानी को दिल्ली लाया जाए और यहां 1618 में लाल किले की नींव रखी गई।

1. भारत के इतिहास से लाल किले का क्या संबंध है ?

2. दिल्ली के लाल किले का नाम लाल किला क्यों पड़ा ?

3. मुगल शासक शाहजहाँ के शासन काल में लाल किले में क्या बदलाव लाया गया ?

प्रश्न ट) महावरो का सही अर्थ से मिलान कीजिए-

- | | |
|-----------------------|----------------------|
| क) पिंड छुड़ाना | बहुत भूख लगना |
| ख) ईद का चाँद | मार डालना |
| ग) पेट में चूहे कूदना | किसी से छुटकारा पाना |
| घ) काम तमाम करना | बहुत दिनों बाद मिलना |

प्रश्न ठ) रेखांकित शब्दों के विलोम शब्दों द्वारा रिक्त स्थान भरिए -

क) मेरी सहेली के पास नया बस्ता है लेकिन मेरा बस्ता----- है।

ख) इस प्रश्न का ----- ढूँढकर लाओ।



Bal Bharati
PUBLIC SCHOOL

Sector – 21, Noida
Phone : 0120-2534064, 2538533 / E-mail : bbpsnd@yahoo.co.
Website : <http://bbpsnoida.balbharati.org>

कार्यपत्रिका - दिसंबर

विषय - संस्कृत

कक्षा - पाँचवीं

नाम -----

अनुक्रमांक ----- वर्ग ----- कक्षा -----

जमा करने की तिथि-

निर्मात्री - इलाश्री जायसवाल

अपठित गद्यांश

एषः देवालयः अस्ति । मम माता प्रतिदिनं तत्र गच्छति । अनेके भक्ताः अपि तत्र गच्छन्ति । मम पिता अपि तत्र प्रतिदिनं गच्छति । सर्वे तत्र पूजां कुर्वन्ति आरतीं च गायन्ति । अन्ते पुरोहितः प्रसादं यच्छति । सर्वे प्रसन्नाः भूत्वा आगच्छन्ति ।

उपर्युक्त गद्यान्श को पढ़कर निम्नलिखित प्रश्नों के उत्तर दीजिए-

1. एषः कः अस्ति ?

उत्तर- _____

2. तत्र के नमन्ति ?

उत्तर- _____

3. पुरोहितः किं करोति ?

उत्तर- _____

4. देवालय शब्द देव + आलय से बना है । इसी प्रकार अन्य शब्द भी बनाकर लिखिए-

उत्तर- _____

प्रश्न-2- दिए गए रंगों के नाम संस्कृत में लिखिए-

लाल- _____ हरा _____

नीला _____ पीला _____

काला _____ सफ़ेद _____

प्रश्न -3- दिए गए संबंधों को संस्कृत में लिखिए-

दादा _____ दादी _____

माता _____ पिता _____

बड़ा भाई _____ छोटी बहन _____

प्रश्न-4- शरीर के अंगों के नाम संस्कृत में लिखिए-

सिर _____ माथा _____

हाथ _____ पैर _____

नाक _____ आँख _____

प्रश्न-5- राष्ट्रीय प्रतीकों के नाम संस्कृत में लिखिए-

1. तिरंगा _____
2. राष्ट्रीय पशु _____
3. राष्ट्रीय पक्षी _____
4. राष्ट्रीय पुष्प _____
5. राष्ट्रीय खेल _____



MATHS HOLIDAY HOMEWORK

Name : _____

Class: V Sec : _____ Roll No. _____

Prepared By: Anita Singh

Q1. Here are four digit cards.

4

5

7

8

Use each card **once** to make these statements correct.

5 3

>

6

2 9

<

1

6 2

>

8

4 1

<

5

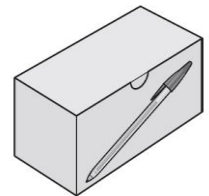
Q2. (a) Write the number in the box to make this fraction sum correct.

$$\frac{1}{3} + \frac{\boxed{}}{6} = 1$$

b) Razi and Mariah each take some of the pens. $\frac{3}{10}$ of the pens are left in the box. Razi takes $\frac{1}{5}$ of the pens.

What fraction of the box of pens does Mariah take?

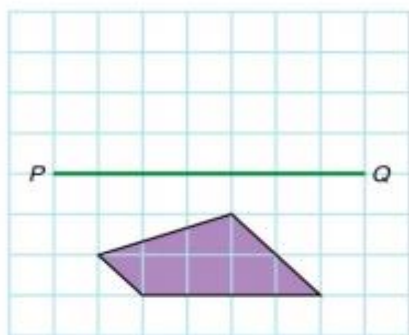
.....



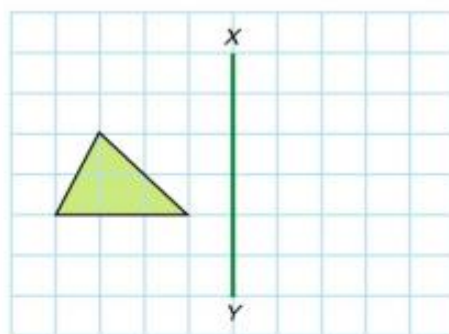
Q3. What number do we get by adding 6 ten thousandths and 30 thousandths together to 32 ten thousands, and multiplying the result with 1 hundredths?

Q4. In the following figures, the solid straight lines are the axes of symmetry; draw the images of reflection to produce figures with reflectional symmetry properties.

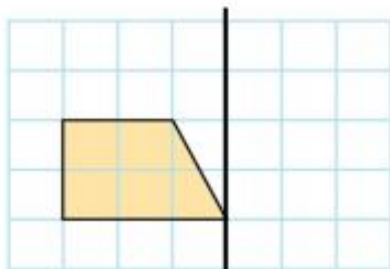
a)



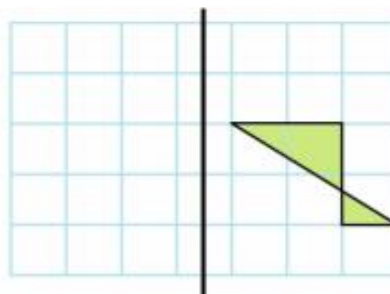
b)



c)



d)



Q5. Carpeting costs \$7.99 a yard. If Jan buys 12.4 yards, how much will it cost her? (Round it to two decimal places)

Q6. Convert 1537 cm to m and express the result as an improper fraction.

Q7. Energy content of different foods is as follows:

Food	Energy Content per kg.
Wheat	3.2 Joules
Rice	5.3 Joules
Potatoes (Cooked)	3.7 Joules
Milk	3.0 Joules

Which food provides the least energy and which provides the maximum? Express the least energy as fraction of the maximum energy.

Q8. Convert the following into fraction and subtract.

a) $7.98 - 3.60$

b) $89.04 - 76.45$

Q9. Put the right card in the right bag.

Cards

(i) $\frac{3}{7}$

(ii) $\frac{4}{4}$

(iii) $\frac{9}{8}$

(iv) $\frac{8}{9}$

(v) $\frac{5}{6}$

(vi) $\frac{6}{11}$

(vii) $\frac{18}{18}$

(viii) $\frac{19}{25}$

(ix) $\frac{2}{3}$

(x) $\frac{13}{17}$

Bags

Bag I



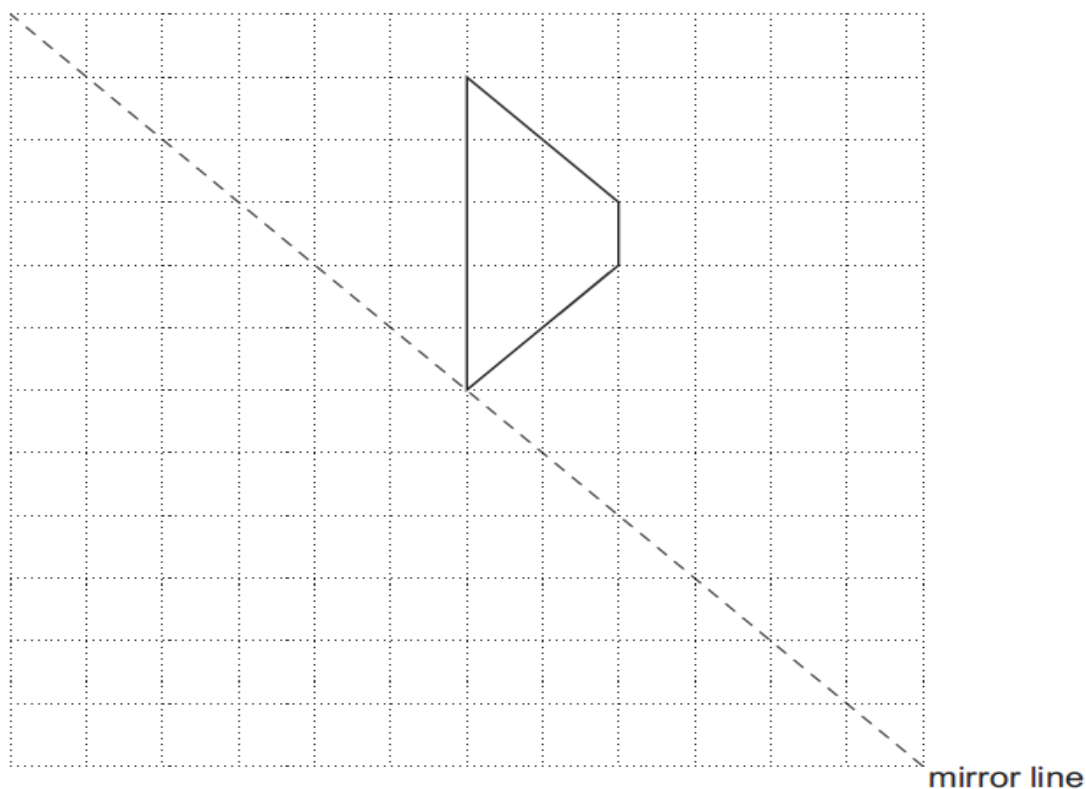
Bag II



Bag III



Q10. Draw the reflection of the trapezium in the mirror line. Use a ruler.



Q11. Examine the number pattern below.

61, 55, 49, 43, 37 ...

Write the next three numbers in the pattern. _____, _____, _____

How do you know which numbers came next?

Q12. Examine the number pattern below. 1,203, 1,624, 2,045, 2,466...

What rule does this pattern follow? _____

Write the next three numbers in the pattern. _____, _____, _____

If the pattern continues, what will the 10th number in the sequence be? _____



ASSIGNMENT SHEET
SUBJECT: SCIENCE
CLASS V

CLASS: V SEC: _____ ROLL NO: _____

PREPARED BY: PRABHAT MISHRA

[illegible]

Q2. Why friction is a necessary evil?

Ans. _____

Q3. What is a lever? Draw diagram to show the three types of levers.

Ans. _____

diagrams

Q4. What are the different forms of energy into which solar energy can be changed? How astronauts and satellites get electricity in space?

Ans. _____

Q5. What is the composition of air?

Ans. _____

Q6. Pen caps and bottle caps close tightly. Why?

Ans. _____



Bal Bharati
PUBLIC SCHOOL

Sector – 21, Noida
Phone : 0120-2534064, 2538533 / E-mail : bbpsnd@yahoo.co.in
Website : <http://bbpsnoida.balbharati.org>

ASSIGNMENT SHEET (2018-19)

CLASS-V

SOCIAL STUDIES

Name : _____

Class : V Section : _____

Roll No.: _____

Prepared by : S Chakraborty

Q1. Identify the pictures of following Social Reformers and provide the required information:



Name:

Birth and Death:

Major Reform Advocated:

.....
.....
.....
.....
.....



Name:

Birth and Death:

Major Reform Advocated:

.....
.....
.....
.....
.....

Q2. Why do you think the First War of Independence failed?

.....

.....

.....

.....

.....

Q3. We have learnt about the World Wars. What do you think can be done to prevent another World War?

.....

.....

.....

.....

.....

Q4. Write about any one leader of India's freedom struggle and why does this leader inspire you?

.....

.....

.....

.....

.....

.....

.....

.....

.....

.....